



INDIAN SCHOOL AL WADI AL KABIR
DEPARTMENT OF MATHEMATICS

REVISION WORKSHEET

RESOURCE PERSON – Mrs. Anuradha Sharma

NAME: _____ CLASS: I SEC: _____ DATE: _____

Q1. Write the number names for the given numerals.

- a. 25 - _____
- b. 39 - _____
- c. 11 - _____
- d. 40 - _____
- e. 47 - _____

Q2. Fill in the missing numerals.

a	20		22			25
b	31			34		36
c	12		14	15		
d	40			43		45

Q3. Fill in the blanks.

- a. The numeral for Fifty is _____.
- b. _____ comes before 1.
- c. One more than 41 is _____.
- d. _____ comes between 34 and 36.
- e. The number before 29 is _____.

CHECKED BY: ACADEMIC COORDINATOR CLASS - I

ISWK/DEPARTMENT OF MATHEMATICS /CLASS I/2023-2024

Q4. Circle the greatest number in the given set.

a.	10	27	39	8
----	----	----	----	---

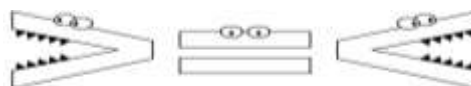
b.	29	12	25	40
----	----	----	----	----

Q5. Colour the smallest number in the given set.

a.	15	12	20	22
----	----	----	----	----

b.	10	19	32	21
----	----	----	----	----

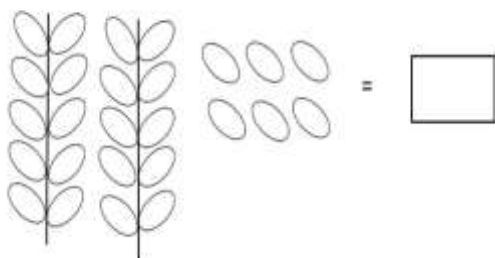
Q6. Insert the correct symbol. (> < =)



- a. 26 _____ 18 b. 30 _____ 30 c. 12 _____ 21
 d. 22 _____ 42 e. 39 _____ 23 f. 29 _____ 29

Q7. Count and write as Tens and Ones.

a.



T O

$$26 = \text{ ____ tens and ____ ones}$$

$$= \text{ ____ + ____ }$$

b.



T O

$$14 = \text{ ____ ten and ____ ones}$$

$$= \text{ ____ + ____ }$$

CHECKED BY: ACADEMIC COORDINATOR CLASS - I

Q8. Arrange the numbers in ascending order. (small to big)



a.	30	22	18	20

b.	50	24	48	21

c.	39	16	29	32

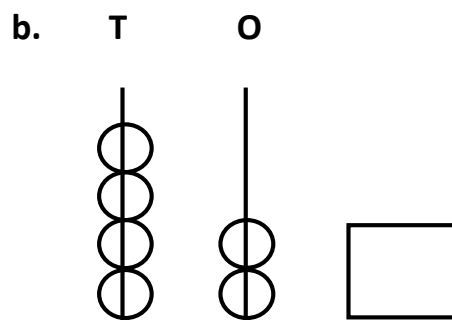
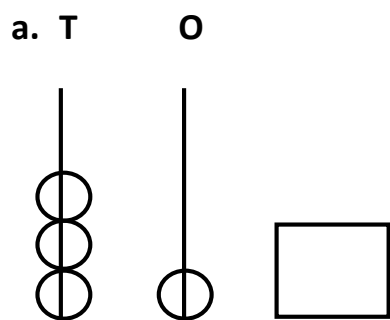
Q9. Add the pictures of the objects and write it in the space provided.

a.  +  =

b.  +  =

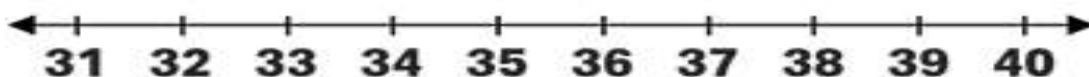
c.  +  =

Q10. Count the beads on the abacus and write the number in the given box.

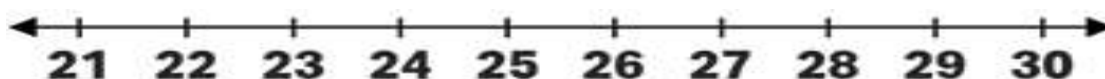


Q11. Add on the number line.


a. $34 + 2 =$ _____




b. $25 + 4 =$ _____



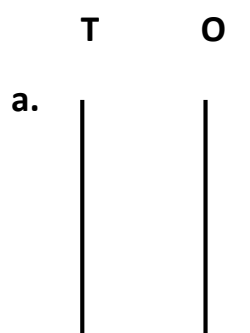
c. $12 + 3 =$ _____



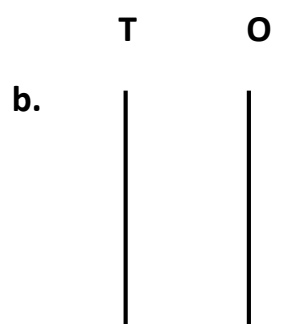
d. $45 + 2 =$ _____



Q12. Draw the beads on the abacus to show the number in the given box.



T	O
2	4



T	O
1	3

*All
The
Best*

CHECKED BY: ACADEMIC COORDINATOR CLASS - I

ISWK/DEPARTMENT OF MATHEMATICS /CLASS I/2023-2024